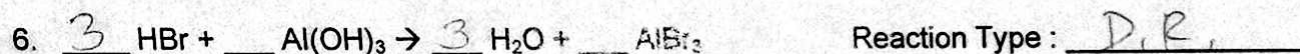
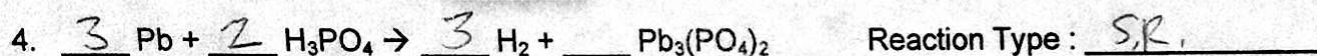
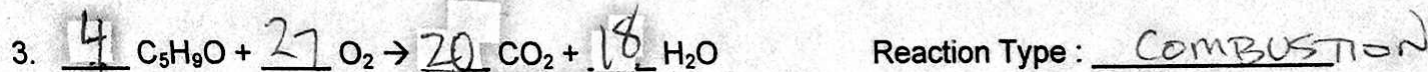
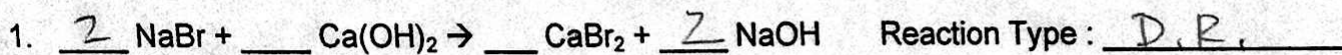


**Types of Chemical Reaction Worksheet**

Balance the reactions 1 to 6 and indicate which type of chemical reaction (synthesis, decomposition, single-displacement, double-displacement or combustion) is being represented:



Indicate which type of chemical reaction (synthesis, decomposition, single-displacement, double-displacement or combustion) is represented in 7 to 20.

